



Additional Assessment Materials
Summer 2021

Pearson Edexcel GCE in Chemistry 9CH0

Resource Set 1 – Topic Group 3

Topics included:

Topic 14: Redox II

Topic 15: Transition Metals

(Public release version)

Pearson: helping people progress, everywhere

Pearson aspires to be the world's leading learning company. Our aim is to help everyone progress in their lives through education. We believe in every kind of learning, for all kinds of people, wherever they are in the world. We've been involved in education for over 150 years, and by working across 70 countries, in 100 languages, we have built an international reputation for our commitment to high standards and raising achievement through innovation in education. Find out more about how we can help you and your students at: www.pearson.com/uk

Additional Assessment Materials, Summer 2021

All the material in this publication is copyright

© Pearson Education Ltd 2021

General guidance to Additional Assessment Materials for use in 2021

Context

- Additional Assessment Materials are being produced for GCSE, AS and A levels (with the exception of Art and Design).
- The Additional Assessment Materials presented in this booklet are an **optional** part of the range of evidence teachers may use when deciding on a candidate's grade.
- 2021 Additional Assessment Materials have been drawn from previous examination materials, namely past papers.
- Additional Assessment Materials have come from past papers both published (those materials available publicly) and unpublished (those currently under padlock to our centres) presented in a different format to allow teachers to adapt them for use with candidate.

Purpose

- The purpose of this resource is to provide qualification-specific sets/groups of questions covering the knowledge, skills and understanding relevant to this Pearson qualification.
- This document should be used in conjunction with the mapping guidance which will map content and/or skills covered within each set of questions.
- These materials are only intended to support the summer 2021 series.

4 This question is about transition metals.

(a) Which of these ions has the electronic configuration $[\text{Ar}]3d^5$?

(1)

- A Cr^{3+}
- B Fe^{2+}
- C Mn^{2+}
- D Mn^{3+}

(b) In which of these complex ions does the transition metal have the oxidation number +3?

(1)

- A $[\text{Ag}(\text{CN})_2]^-$
- B $[\text{CuCl}_4]^{2-}$
- C $[\text{Fe}(\text{CN})_6]^{3-}$
- D $[\text{Ni}(\text{EDTA})]^{2-}$

(c) Which type or types of bonding exist **within** the complex ion $[\text{Cr}(\text{H}_2\text{O})_6]^{3+}$?

(1)

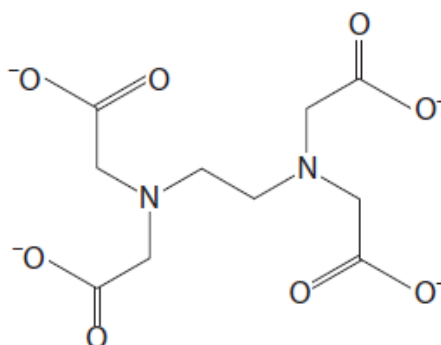
- A dative covalent only
- B dative covalent and covalent only
- C dative covalent and ionic only
- D dative covalent, covalent and ionic

(d) Which **best** explains why $[\text{Cu}(\text{NH}_3)_2]^+$ ions are colourless?

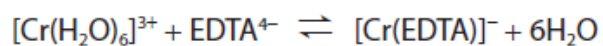
(1)

- A all complex ions having a metal ion with a +1 charge are colourless
- B no electronic transitions can take place between *d*-orbitals
- C the *d*-orbitals cannot split in energy
- D there are no electrons in the *d*-subshell

(c) The ligand ethylenediaminetetraacetate, EDTA^{4-} , has the structure shown.



When a solution of EDTA^{4-} is added to a solution of $[\text{Cr}(\text{H}_2\text{O})_6]^{3+}$ ions, a new complex ion is formed.



The equilibrium constant for this equilibrium is $2.51 \times 10^{23} \text{ dm}^3 \text{ mol}^{-1}$.

By considering the equilibrium for this reaction and changes in entropy, comment on the value of the equilibrium constant. No calculations are required.

(3)

.....

.....

.....

.....

.....

.....

.....

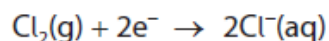
.....

.....

(d) Aqueous vanadium(II) chloride, $VCl_2(aq)$, can be oxidised by bubbling gaseous chlorine, $Cl_2(g)$, through the solution in the absence of air.

40.0 cm^3 of 0.100 mol dm^{-3} VCl_2 solution was oxidised by 144 cm^3 of chlorine gas, at room temperature and pressure (r.t.p.).

The chlorine was reduced to chloride ions, according to the half-equation



[Molar volume of a gas at r.t.p. = $24.0\text{ dm}^3\text{ mol}^{-1}$]

(i) Use these data to calculate the final oxidation state of vanadium.
You **must** show your working.

(5)

(ii) State the initial and final colours you would see as the chlorine bubbles through the aqueous vanadium(II) chloride, $VCl_2(aq)$.

(2)

(Total for Question 3 = 18 marks)

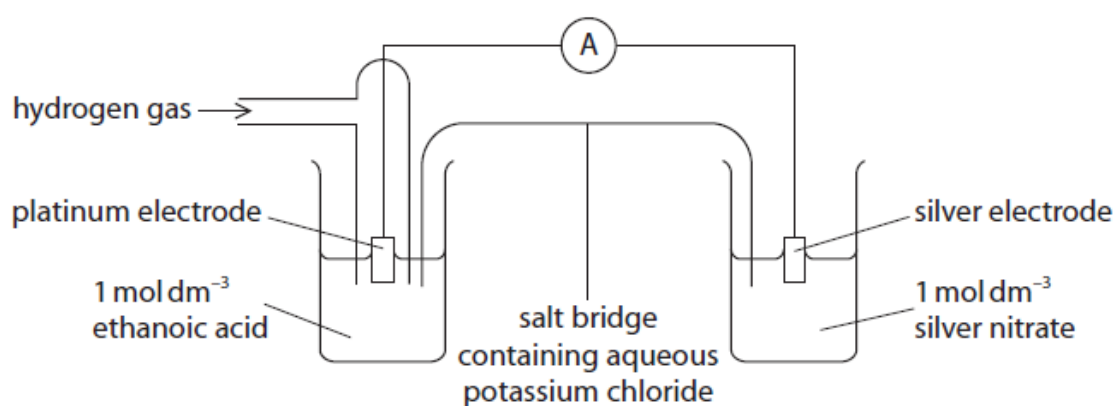
2 This question is about the $\text{Ag}^+(\text{aq})|\text{Ag}(\text{s})$ half-cell.

(a) A student was asked to plan an experiment to measure the standard electrode potential of the $\text{Ag}^+(\text{aq})|\text{Ag}(\text{s})$ half-cell.

(i) State the conditions of temperature and pressure under which standard electrode potentials are measured.

(1)

(ii) The student drew the diagram shown.



Identify **three** mistakes in this diagram and the modifications that should be made to correct them.

(3)

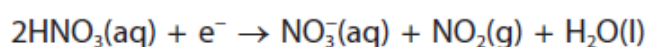
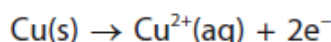
Mistake in diagram	Modification needed to correct mistake

Total for Question 2 = 4 marks

- 10 Yellow gold is used to make jewellery. It is an alloy of copper, gold and silver. The purity of gold is measured in carats. The higher the carat, the higher the percentage of gold in the alloy. Pure gold is 24 carat.

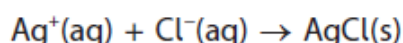
A sample of yellow gold is analysed using the steps below.

- Step 1 Excess concentrated nitric acid is reacted with 1.250 g of the alloy. The gold does **not** react but the copper and silver do react. The half-equations are



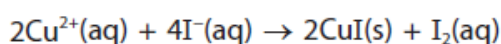
- Step 2 The mixture is diluted with distilled water and the gold is filtered off.

- Step 3 Excess hydrochloric acid is added to the filtrate. It reacts with the silver ions to form a precipitate of silver chloride.

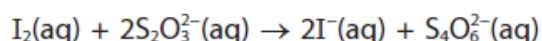


- Step 4 The silver chloride precipitate is filtered off, washed, dried and weighed. The mass of silver chloride formed is 0.706 g.

- Step 5 Excess potassium iodide is added to the remaining solution. A precipitate of copper(I) iodide and a solution of iodine forms.



- Step 6 The resulting mixture is titrated with $0.100 \text{ mol dm}^{-3}$ sodium thiosulfate solution.



The titre is 39.40 cm^3 .

- (a) Write the equation for the reaction of copper with concentrated nitric acid, using the half-equations given in Step 1. State symbols are not required. (1)

- (b) State the indicator used and its colour change at the end-point in the titration in Step 6. (2)

(c) The table shows the percentage by mass of gold in four different carats of yellow gold.

Carat	Percentage by mass of gold
9	37.5
10	41.7
14	58.3
18	75.0

Determine, using the experimental data, the carat of the sample of yellow gold that was analysed.

(6)

(Total for Question 10 = 9 marks)

Total for Test = 40 marks